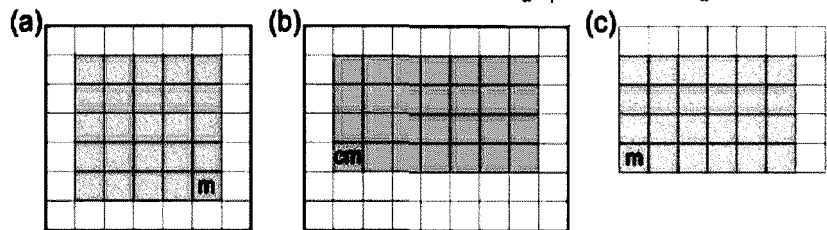


Time: 10 Minutes Paper Math 4 Total Marks: 10

6th Month, 2nd Week, 1st Day Syllabus: Unit 6: Exercise-4 Q.No.1

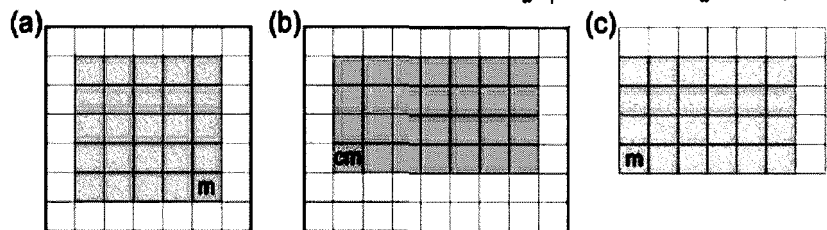
Q.No.1. Find the perimeter of given figures: (10)
سوال نمبر 1: درج ذیل اشکال کا احاطہ معلوم کریں:



Time: 10 Minutes Paper Math 4 Total Marks: 10

6th Month, 2nd Week, 1st Day Syllabus: Unit 6: Exercise-4 Q.No.1

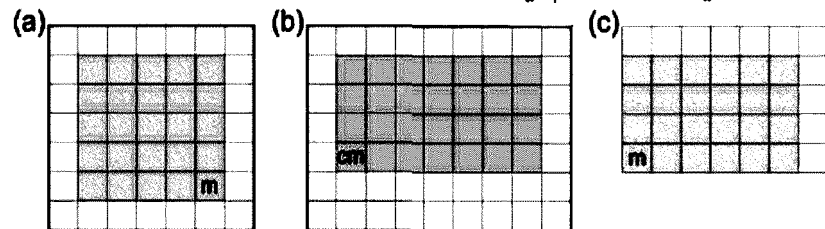
Q.No.1. Find the perimeter of given figures: (10)
سوال نمبر 1: درج ذیل اشکال کا احاطہ معلوم کریں:



Time: 10 Minutes Paper Math 4 Total Marks: 10

6th Month, 2nd Week, 1st Day Syllabus: Unit 6: Exercise-4 Q.No.1

Q.No.1. Find the perimeter of given figures: (10)
سوال نمبر 1: درج ذیل اشکال کا احاطہ معلوم کریں:



Time: 10 Minutes Paper Math 4 Total Marks: 10

6th Month, 2nd Week, 1st Day Syllabus: Unit 6: Exercise-4 Q.No.1

Q.No.1. Find the perimeter of given figures: (10)
سوال نمبر 1: درج ذیل اشکال کا احاطہ معلوم کریں:

